

Time: 2Hrs

M:M:40M

Instructions:-

1. Handwriting should be neat and clean.
2. All the questions are compulsory.

(I) MCQ's

(Section - A)

(5*1/2=2.5M)

1. In a Single- parent family, children stay with
 - a) One parent
 - b) both parents
 - c) grandparents
 - d) cousins only
2. We can write and eat with our
 - a) Eyes
 - b) ears
 - c) hands
 - d) hairs
3. The elderly people are
 - a) Old
 - b) wise
 - c) experienced
 - d) all of these
4. We must share work at
 - a) home
 - b) market
 - c) beach
 - d) fair
5. Work is important in
 - a) school
 - b) office
 - c) life
 - d) All of these

(Section - B)

(II) Fill in the blanks:-

(4*1/2=2M)

(sharing, money, influence, nose)

1. People do different kinds of work to earn _____.
2. _____ and caring is important for a family.
3. We smell with our _____.
4. Family members _____ our habits and values.

(III) True/False

(4*1/2=2M)

1. My uncle's son is my cousin.
2. Brain is an external organ.
3. Every family follows certain maps.
4. Child labour is banned in India.

(IV) Matching

(4*1/2=2M)

- | | |
|---------------------------|--------------------------|
| 1. Work | Feel |
| 2. Sarva Shiksha Abhiyaan | Wise |
| 3. Elderly people | Free books and education |
| 4. Skin | Money |

(V) Circle the correct word:-

(5*1=5M)

- | | | |
|-----------------|------------|-------------|
| 1. Family | Famile | Famili |
| 2. External | Extrnal | Externl |
| 3. Shring | Sharng | Sharing |
| 4. Nuclar | Nuclear | Nucleier |
| 5. Ocupation | Occupation | Ocupasion |
| 6. Membrs | Mambrs | Members |
| 7. hereditary | Hereditry | Hereditry |
| 8. Tradedetions | Traditions | Trdidetions |
| 9. Internal | Intrnal | Intrnle |
| 10. Nrves | Nerves | Nervse |

(Section – C)

(VI) Answer the following:-

1. We can see the _____.
2. A nuclear family is a _____.
3. Family members share their _____.
4. CRY, UNICEF are the organizations that help _____.
5. The skin helps us to _____.

(VII) Answer the following questions

(3*2=6M)

- Q1. What is an occupation?
- Q2. What are the different types of families?
- Q3. Which sense organ does help us to taste?

(VIII) Answer the following questions

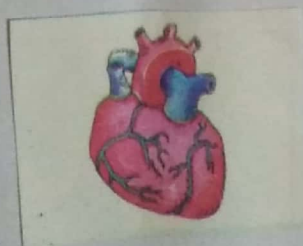
(2*3=6M)

- Q1. What is child labour?
- Q2. What are hereditary features?

(IX) Answer the following questions

(2*5=10M)

- Q1. (a) What is the difference between internal and external organs? (3M)
(b) What is a happy family? (2M)
- Q2. (a) How should we treat the old people? (2M)
(b) Name the following pictures (3M)



(2M)

(X) HOTS

- Q. What is your mother tongue? How did you learn it?

BCM Sen. Sec. School, Basant City, Pakhowal Road, Ludhiana
Sample Paper(May,2019)
Subject – English
Std. – III

Time - 2hrs

M. M. – 40

Section - A (Reading)(8M)

A1. Read the passage carefully and answer the following questions:- (4M)

Aarti is Manu's best friend. She is getting ready to go to Manu's birthday party in the evening. She bought a big book of stories as a birthday gift for Manu. She wants to wrap it in red colour paper. She knows that red is Manu's favourite colour.

Q1. Who is Manu's best friend?

Q2. What did Aarti buy as a birthday gift for Manu?

Q3. Complete the sentence:-

She wants to wrap it in _____.

Q4. Make sentence of the following word:-

Friend

A2. Read the passage carefully and answer the following questions:- (4M)

Siya gets up early in the morning. She goes to washroom and then she brushes her teeth. She asks for the towel and takes bath. Her mother combs her hair and gets her ready for the school. She takes sandwich and milk in the breakfast. Her school bus comes at 8:00 a.m. She takes her bag and kisses her mother.

Write the option you consider the most appropriate.

Q1. When does Siya get up?

- a) Evening b) Morning c) Afternoon d) Midnight

Q2. Who combs Siya's hair?

- a) Mother b) Father c) Grandmother d) Sister

Q3. Write True or False:-

Siya's school bus comes at 6:00 a.m. _____

Q4. Choose the correct Antonym of the word 'Early'.

- a) First b) Late c) Night d) Evening

Section - B (Writing) (10M)

B1. Imagine you are Anita. Your friend Reema did not come to school today. Write a message to her telling about the 'Book Fair'. Also put the message in a box. (5M)

B2. Write an application to the Principal of your school for an urgent piece of work. (5M)

Or

Write a paragraph on "My School".

SAMPLE PAPER





SUBJECT – MATHEMATICS

STANDARD – III

MENTAL MATHS

M.M. 40

(One mark each)

1. 100 more than 432 is _____
2. The face value of 2 in 4215 is _____
3. If  = 6, then    = _____
4. Greatest 2-digit even number is _____
5. $531 + 0 + 873 = 873 +$ _____

SECTION – A

(One mark each)

M.C.Q's –

1. Addition means putting _____
a) different b) together c) product d) quotient
2. Data means _____
a) sum b) angle c) information d) multiply
3. The greatest 4-digit even number is _____
a) 9999 b) 9998 c) 8999 d) 8998
4. _____ has no predecessor
a) 2 b) 0 c) 1 d) 9
5. Even Number + Odd Number = _____ Number
a) Odd b) Prime c) Even d) Fractional

SECTION – B

(Two marks each)

6. Complete the table :


Predecessor	Number	Successor
?	6790	?
4321	?	?

7. Put the sign $>$, $<$ or $=$:
a) 4568 5660
b) 1000 1005
8. Add the following :
a)
$$\begin{array}{r} 5678 \\ + 6594 \\ \hline \end{array}$$

b)
$$\begin{array}{r} 1075 \\ + 9616 \\ \hline \end{array}$$

9. Draw a pictograph to show the mode of transport used by Students to come school :

Mode of transport	Car	Bus	Cycle	Scooty
Number of students	50	70	60	20

(Represent 10 students by one )

10. a) Write in expanded form : $4106 =$ _____
b) Count by five's and complete the following : 4259 , _____ , _____ , _____ , _____
11. A shopkeeper sold 493 fans on Monday, 145 fans on Tuesday and 436 fans on Wednesday. How many fans did he sell in all ?

SECTION - C

(Three marks each)

12. a) Write in words : i) 1267 ii) 7003
b) Write in numerals : Two thousand nine hundred six
13. Write the place value and face value of underlined digits :




Number	Place Value	Face Value
435 <u>6</u>		
<u>3</u> 214		
19 <u>8</u> 0		


14. a) There are 4576 mango trees and 7418 orange trees in a garden. Find the total number of trees in the garden.
b) Add : $5476 + 2618 + 6542$
15. a) Deepak reads 244 pages of a book on Friday and 367 on Saturday. Find the total number of pages read in two days ?
b) Estimate the sum to nearest hundred : $457 + 324$

16. Complete the tally marks table :

Animals	Number	Tally Marks
Cats	7	
Dogs	10	
Horses	4	

17. Read the pictograph given below and answer the questions :

Underweight Students	
Overweight Students	
Normal Weight Students	

(One  = 5 Students)

- a) How many students are Overweight ?
b) How many students are normal in weight ?
c) What is the total number of students ?